



PLANNED INSTRUCTION LESSON MATERIALS

3rd Grade: Neimeic/Brown

DUE DATE: FRIDAY, MAY 8TH

Please complete the following materials by the due date noted above.

Completed materials may be dropped off at the school (1006 West 10th Street) during food distribution Tuesdays and Fridays from 10:00am – 12:00noon, or turned in when the next week's materials are delivered to your home.

If you need assistance in completing the attached materials, please reach out to your classroom teacher via email, the school's website or Facebook page, or Class Dojo. You may also call the school directly Monday – Friday from 9:00am – 11:00am at 814-520-6468

Mrs. Veronica Will, Principal 814 873-5158

Mr. Aubrey Favors, Interim CEO 814 812-3026

1. Find the product.

$$8 \times 5.$$

[Need a Hint?](#)

- A. 32
 - B. 30
 - C. 40
 - D. 35
-


2. The flag of Catalonia, in Spain, has 5 gold stripes. How many gold stripes are there on 6 flags of Catalonia?

$$6 \times 5 = ?$$

[Need a Hint?](#)

- A. 36
 - B. 30
 - C. 40
 - D. 35
-

3. Draw a picture or an array to find 5 rows of 5.



[Need a Hint?](#)

- A. 20
- B. 25
- C. 30
- D. 35


4. Write an addition sentence to help find the product of 4 groups of 5.

$$4 \times 5 = ?$$

[Need a Hint?](#)


- A. $5 + 5 = 10$;
 $4 \times 5 = 10$
- B. $5 + 5 + 5 = 15$;
 $4 \times 5 = 15$
- C. $5 + 5 + 5 + 5 = 20$;
 $4 \times 5 = 20$
- D. $5 + 5 + 5 + 5 + 5 = 25$;
 $4 \times 5 = 25$

5. Draw a picture or use an array to multiply.



[Need a Hint?](#)

- A. 20
- B. 25
- C. 30
- D. 35





 This is the end of the quiz. When you have completed all the questions and reviewed your answers, press the button below to grade the quiz.

Grade the Quiz

1. Which digital clock shows the same time as the analog clock?

[Need a Hint?](#)







- A. 
- B. 
- C. 
- D. 

2. Which digital clock shows the same time as the analog clock?

[Need a Hint?](#)



- A. 
- B. 
- C. 
- D. 

3. Write the time on the clock.

[Need a Hint?](#)



- A. 4:09
- B. 4:45
- C. 3:45
- D. 9:20

4. Write the time on the clock.

[Need a Hint?](#)




- A. 5:58
- B. 6:11
- C. 6:58
- D. 11:30

5. Write the time on the clock.

[Need a Hint?](#)




- A. 1:16
- B. 6:05
- C. 2:33
- D. 1:33

 This is the end of the quiz. When you have completed all the questions and reviewed your answers, press the button below to grade the quiz.

Grade the Quiz

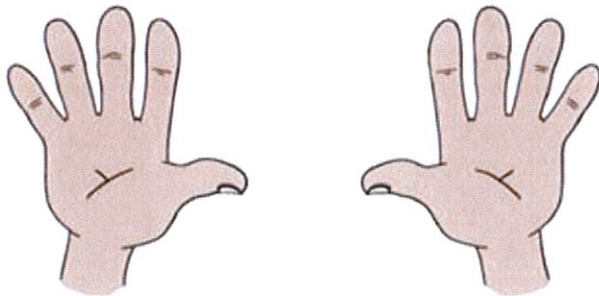


1. Which addition sentence and multiplication sentence represents 3 groups of 2?




- A. $3 + 3 = 6$;
 $3 \times 3 = 9$
- B. $3 + 3 = 6$;
 $2 \times 3 = 6$
- C. $2 + 2 + 2 = 6$;
 $3 \times 2 = 6$
- D. $2 + 2 + 2 = 6$;
 $3 \times 3 = 9$

2. Which addition sentence and multiplication sentence represents 2 groups of 5?




- A. $2 + 2 + 2 + 2 + 2 = 10$;
 $2 \times 5 = 10$
- B. $10 + 0 = 10$;
 $5 \times 2 = 10$
- C. $5 + 5 = 10$;
 $2 \times 2 = 10$
- D. $5 + 5 = 10$;
 $2 \times 5 = 10$

3. Which multiplication sentence is represented by the array?




- A. $2 \times 8 = 16$
- B. $2 \times 9 = 16$
- C. $2 \times 8 = 18$
- D. $2 \times 8 = 10$

4. Find the product.



5. Find the product.



- A. 5
- B. 7
- C. 10
- D. 15

- A. 2
- B. 3
- C. 5
- D. 6

Multiply by 2's and 5's Quiz

Your email address (vwill@erieriseacademy.org) will be recorded when you submit this form. Not you? [Switch account](#)

* Required

$9 \times 2 = *$

2 points

- 18
- 20
- 22
- 24

$7 \times 5 = *$

2 points

- 10
- 18
- 35
- 40

$5 \times 5 = *$

2 points

- 10
- 15
- 20
- 25



$10 \times 2 = *$

2 points

- 20
- 15
- 10
- 30

$3 \times 2 = *$

2 points

- 8
- 10
- 6
- 12

Bill has six shirts. Each shirt has two buttons. How many buttons are there in all? *

2 points

- 14
- 12
- 16
- 20

Jose and Sam each have 5 stickers. How many stickers do they have in all? *

2 points

- 5
- 10
- 25
- 20



4 groups of 2= *

2 points

- 6
- 12
- 10
- 8

6 groups of 5= *

2 points

- 20
- 25
- 30
- 35

Juan and Maria each have 8 pencils. How many pencils do they have in altogether? * *

2 points

- 14
- 16
- 18
- 22

Send me a copy of my responses.

Submit


This form was created inside of Erie Rise Academy. [Report Abuse](#)

Google Forms



Compare and Contrast

Mercury and Pluto



Mercury is the second smallest of the nine planets in our solar system. It is also the nearest planet to the sun. Mercury spins very slowly. The side next to the sun gets very hot before it turns away from the sun. As the planet slowly spins, the frozen side then becomes burning hot and the hot side becomes freezing cold. Even though Mercury spins slowly, it orbits the sun very quickly. That is why it was named Mercury- after the Roman messenger for the gods.

Pluto is the planet farthest away from the sun. Pluto is so far away that it gets little of the sun's heat. That is why it is freezing cold on Pluto. Pluto is the smallest planet in the solar system. It is even smaller than Mercury. Some scientists think that Pluto was once one of Neptune's moons that escaped from orbit and drifted into space. Pluto is so far away from the sun that it takes 247 Earth years just to orbit the sun once.

Compare/Contrast Mercury and Pluto

Select the Correct Answer.

Your email address (vwill@erieriseacademy.org) will be recorded when you submit this form. Not you? [Switch account](#)

* Required

Which planet is smaller? *

1 point

- Mercury
- pluto

Which planet orbits the sun very quickly? *

1 point

- Pluto
- Mercury

Which planet orbits the sun very slowly? *

1 point

- Mercury
- Pluto

_____ might have been one of Neptune's moons. *

1 point

- Pluto
- Mercury



The temperature on _____ is sometimes burning hot and sometimes freezing cold. *

1 point

- Pluto
- Mercury

Which planet is closest to the sun?

1 point

- Pluto
- Mercury

Which planet is the farthest from the sun? *

1 point

- Pluto
- Mercury

Send me a copy of my responses.

This form was created inside of Erie Rise Academy. [Report Abuse](#)



Suffixes

Choose the correct ending of the words

Then choose the correct spelling of the words

- y
- ly
- ment
- ive

Your email address (vwill@erieriseacademy.org) will be recorded when you submit this form. Not you? [Switch account](#)

Choose the correct suffix to add to the base word: quiet

2 points

- ly
- ment
- y

Choose the correct suffix to add to the base word: settle

2 points

- y
- ive
- ment

Which word is spelled correctly?

2 points

- slighty
- slightly
- slightle



Which word is spelled correctly?

2 points

- payment
- paymint
- paiment

Which word is spelled correctly?

2 points

- scaree
- scari
- scary

Which word is spelled correctly?

2 points

- secreteve
- secretive
- secretiv

Send me a copy of my responses.

This form was created inside of Erie Rise Academy [Report Abuse](#)

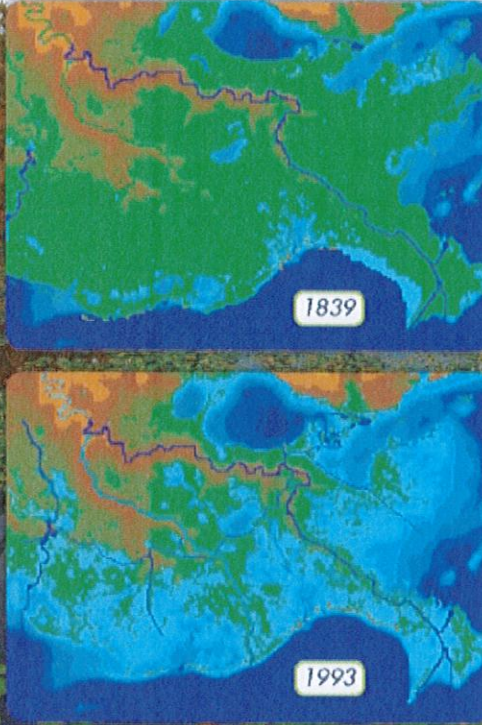


my planet DIARY **Connections**

Wetlands once covered about 392 million acres (159 million hectares) in what is now the United States. Today, Alaska, Florida, Louisiana, Minnesota, and Texas have the most acres of wetlands. Alaska has lost little of its wetlands. But wetlands in many other states are disappearing. Consider Louisiana. The state loses areas of wetlands the size of a football field every 30 minutes!

You can use geography skills to understand how Louisiana's wetlands are changing. Look at the maps. The first map shows Louisiana's coast in 1839. The second map shows the same coast more than 150 years later. The green areas are areas of wetland. Notice the changes.

Draw on the 1993 map. Use a red pencil to show how you think the map would change if wetland loss continues.



My Planet Diary Response

Please answer the question with at least 3-5 sentences.

* Required

Name? *

Your answer

Why does the loss of wetlands put animals in danger? *

Your answer

Submit

Never submit passwords through Google Forms.

This form was created inside of Erie Rise Academy. [Report Abuse](#)

Google Forms




What is an Ecosystem?




A place for living things:


A living thing needs somewhere to call home or an **ENVIRONMENT**. A living things environment is everything around it. An environment has both **living** and **nonliving** parts.



A **LIVING PART** in an environment includes plants, animals and other living things, like insects.



A **NONLIVING PART** in an environment is things like air, water, soil and temperature.




Parts of an Ecosystem:

The living and nonliving parts of an environment interact. Interact means to act together. These interacting parts make up an


ECOSYSTEM.

The living parts of an ecosystem depend on nonliving parts. For example, plants need sunlight, soil, air, and water to grow. The living parts also depend on one another. For example, animals eat other living things. Some animals use plants for shelter.




Habitats:

The place where a living thing makes its home is its **HABITAT**. A habitat has everything that a plant or animal needs to live. A habitat can be the water in a wetland. It can be the soil beneath a rock or even a crack in a sidewalk.




Groups within Ecosystems:

All the living things of the same kind that live in the same place make up a **POPULATION**. Populations can vary in size. Being a member of a population have different advantages, like being able to find more food or shelter.



All the populations that live in the same place make up a **COMMUNITY**. Populations in a community depend on each other.



What is an Ecosystem?

Check my Progress

Your email address (vwill@erieriseacademy.org) will be recorded when you submit this form. Not you? [Switch account](#)

* Required

What is an Ecosystem? *

1 point

- A place something lives
- Where living and nonliving parts of an environment interact with each other
- Ms G's fish tank



Select the following living parts of an ecosystem. *

1 point




A cloud



A plant



A cat



The snow

True or False: An animal's habitat does not have everything that a plant or animal needs? *

1 point

True

False

A group of living things that are all the same that all live in the same area is called a what? *

1 point

Ecosystem

Population

Family

Habitat



Many populations in one area that work together to survive are called what? *

1 point

- Family
- A unit
- School
- Community


Send me a copy of my responses.

0/100

This form was created inside of Erie Rise Academy [Report Abuse](#)



CALL THE COPS!



C Did you capitalize?
The dog is big.

O Did you organize the words correctly?
The dog is big.

P Did you punctuate?
The dog is big.

S Did you check the spelling of each word?
The dog is big.

✓ ✓ ✓ ✓

Writing Sentences

Your email address (vwill@erieriseacademy.org) will be recorded when you submit this form. Not you? [Switch account](#)

Write a sentence about how people show kindness in our classroom. 2 points

Your answer

Write a complete sentence about how people show kindness in our school. 2 points

Your answer

Write a complete sentence about how people show kindness in our community. 2 points

Your answer

Write a complete sentence about how someone showed kindness to you at school. 2 points

Your answer

Write a complete sentence about how you showed kindness to someone in your classroom. 2 points

Your answer

Send me a copy of my responses.



Submit



Never submit passwords through Google Forms

This form was created inside of Erie Rise Academy. [Report Abuse](#)



Friendly Letter

Heading
Writer's address
Date

554 Lake Lane
Lake Wylie, SC 29710
October 28, 2013

Dear Aunt Rita,

Greeting
A way to begin the letter

I had a wonderful time visiting you this summer. Swimming in your pool was a lot of fun. I liked your slide and playing Marco Polo with my cousins.

Body
Personal message

Thank you for taking me to the museum too. That was so thoughtful. I learned so much about the Revolutionary War. I wonder if I would be a Patriot or Loyalist?

I will never forget my visit with you. I hope to come back next summer! Will you be able to come see us soon? I miss you!

Closing
A way to end the letter

Love,

Signature
The writer signs his/her name

Jeanie

#5 - Quiz Assignment

What is the name of the first part that you write in a friendly letter?

1 point

- Signature
- Body
- Closing
- Heading

What is the name of the last part of a friendly letter?

1 point

- Body
- Signature
- Address
- Date

What part of a friendly letter is the message that you want to talk about?

1 point

- Heading
- Greeting
- Closing
- Body



What is the correct order of the parts of a friendly letter?

2 points

- Heading, Greeting, Body, Closing, Signature
- Greeting, Heading, Body, Closing, Signature
- Body, Heading, Greeting, Closing, Signature
- Greeting, Body, Heading, Signature, Closing

This form was created inside of Erie Rise Academy [Report Abuse](#)

